

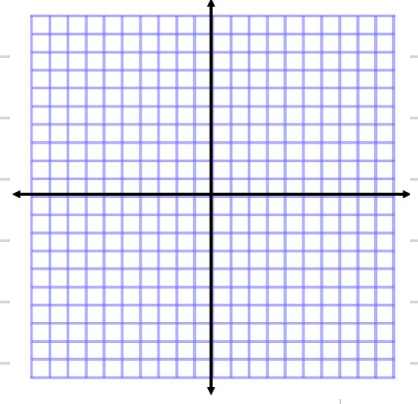
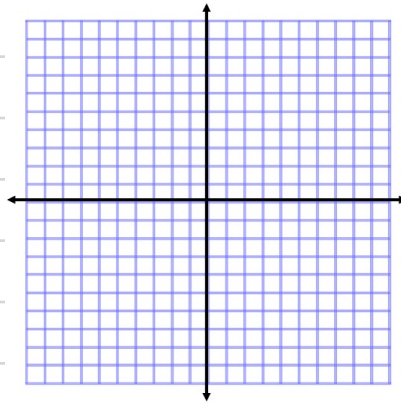
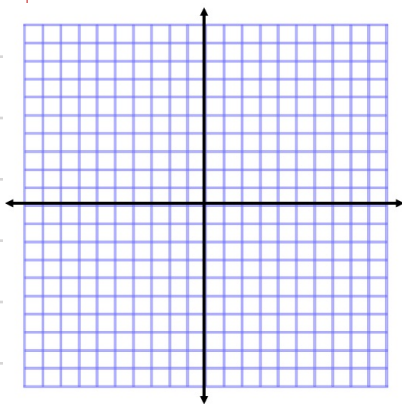
4/10/13 Warm Up

Graph each linear equation

① $y = 4x - 3$

② $y = -\frac{1}{2}x + 2$

③ $y > \frac{5}{3}x - 2$



Get into slope intercept form ($y = mx + b$)

④ $3y - 4x = 9$

⑤ $2y + 7x = 16$

⑥ $3y = 4x - 12$